




# Fall Addition and Subtraction



# Even or Odd?

Add or subtract to solve the problem. If the answer is even, color the leaf red.  
If the answer is odd, color the leaf orange.


$5 + 3 =$



$4 + 6 =$




$7 - 2 =$



$12 - 7 =$



$11 + 4 =$



$5 - 2 =$





$8 + 7 =$



$15 + 1 =$



$9 - 3 =$





# Draw To Solve

1. Ally gathers 5 green apples and 6 red apples. How many apples did Ally gather in total?

$$\underline{\hspace{2cm}} \quad + \quad \underline{\hspace{2cm}} \quad = \quad \underline{\hspace{2cm}}$$

2. The tree had only 10 leaves left on the branches. The wind blew 3 of them off. How many leaves are left on the branches?

$$\underline{\hspace{2cm}} \quad - \quad \underline{\hspace{2cm}} \quad = \quad \underline{\hspace{2cm}}$$



# Help the Squirrel Find His Missing Acorns!

$$8 - \underline{\quad\quad\quad} = 3$$

$$3 + \underline{\quad\quad\quad} = 7$$

$$\underline{\quad\quad\quad} + 9 = 11$$

$$9 + \underline{\quad\quad\quad} = 12$$

$$4 + \underline{\quad\quad\quad} = 10$$

$$\underline{\quad\quad\quad} - 5 = 10$$

$$\underline{\quad\quad\quad} - 2 = 3$$


$$\underline{\quad\quad\quad} + 6 = 7$$





# Be the Teacher!

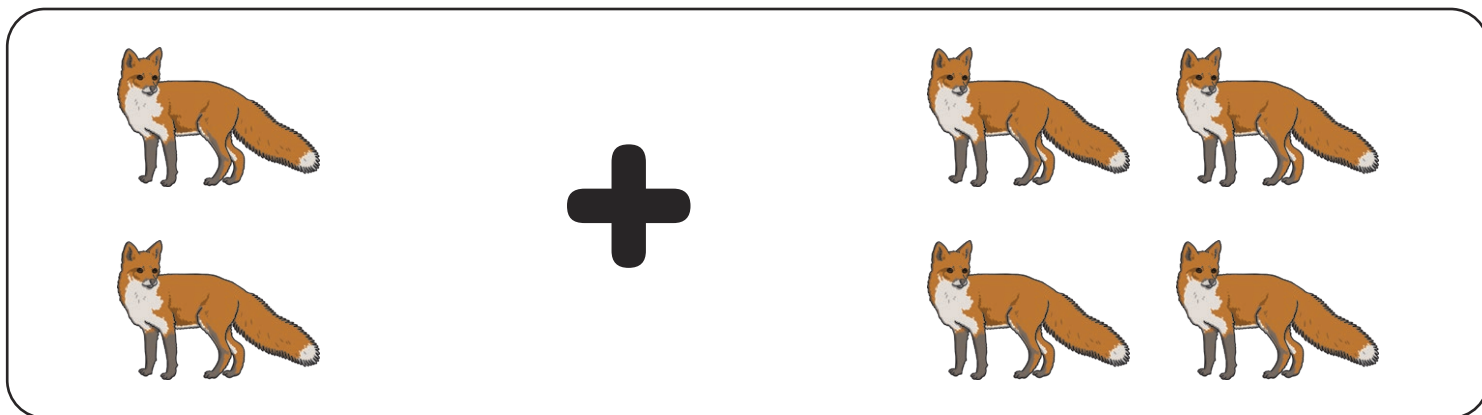
Write a word problem to match each picture.



---

---

---



---

---

---